

General/Particular Solutions

$$f'(x) = 6x, \quad f(0) = 8$$

$$f(x) = 3x^2 + C$$

general solution

Find the integral
of $f'(x)$

$$8 = 3(0^2) + C$$

Plug in $f(0) = 8$

$$8 = 0 + C$$

$$8 = C$$

$$f(x) = 3x^2 + 8$$

particular solution

Plug C back into
the original equation

$$f''(x) = x^{-3/2}, \quad f'(4) = 2, \quad f(0) = 0$$

$$f'(x) = -2x^{-1/2} + C$$

general solution

$$2 = -2\left(\frac{1}{\sqrt{4}}\right) + C$$

plug in $f'(4) = 2$
($4^{-1/2} = \frac{1}{\sqrt{4}}$)

$$2 = -1 + C$$

$$3 = C$$

$$f'(x) = -2x^{-1/2} + 3$$

$$f(x) = -4x^{1/2} + 3x + C$$

$$0 = -4(0) + 3(0) + C$$

plug in $f(0) = 0$

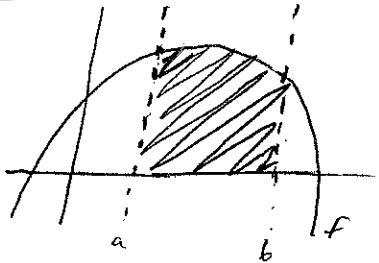
$$0 = C$$

$$f(x) = -4x^{1/2} + 3x + 0$$

$$f(x) = -4x^{1/2} + 3x$$


particular solution

Area of a Region



Area of a region bounded by $f(x)$ & x -axis, between a and b is

$$\int_a^b f(x) dx$$



Area of a region between two function $f(x)$ & $g(x)$, between a and b is


$$\int_a^b (f(x) - g(x)) dx = \int_a^b f(x) dx - \int_a^b g(x) dx$$

Function on top

Function on bottom

Examples:

- ① Find the area of the region bounded by the graphs of the equations $y = x^3 + x$, $x = 4$, $y = 0$.



$$\int_0^4 (x^3 + x) dx$$

$$= \frac{1}{4} x^4 + \frac{1}{2} x^2 \Big|_0^4$$

$$= \frac{1}{4} (4)^4 + \frac{1}{2} (4)^2 - 0$$

2/10/17 Riemann Sums + Definite Integrals

$$\sum_{i=1}^n f(c_i) \Delta x_i, \quad x_{i-1} \leq c_i \leq x_i$$

$$\frac{b-a}{n} = \Delta x \quad \lim_{\Delta x \rightarrow 0} \sum_{i=1}^n f(c_i) \Delta x = \int_a^b f(x) dx$$

limit as a definite integral, where c_i is any point in the i th subinterval
interval = $[0, 4]$

$$c_i = x$$

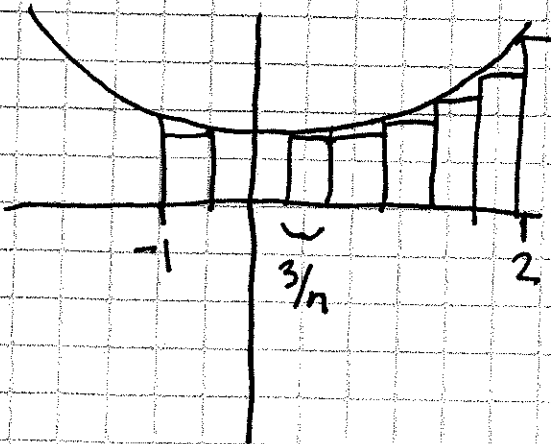
$$\int_0^4 5x(6-x)^2 dx$$

$$\lim_{\Delta x \rightarrow 0} \sum_{i=1}^n 5c_i(6-c_i)^2 \Delta x_i =$$

definite integral as a limit

$$\int_{-1}^2 (3x^2 + 2) dx = \lim_{n \rightarrow \infty} \sum_{i=1}^n \left(3 \left(-1 + \frac{3}{n}i \right)^2 + 2 \right) \cdot \left(\frac{2 - (-1)}{n} \right)$$

\uparrow height of interval
 \uparrow width interval



$$= \lim_{\Delta x \rightarrow 0} \sum_{i=1}^n \left[3 \left(-1 + \Delta x_i \right)^2 + 2 \right] \cdot \Delta x$$

Mean Value Theorem: If f is continuous on the closed interval $[a, b]$ then there exists a number c in the closed interval $[a, b]$ such that $\int_a^b f(x) dx = f(c)(b-a)$

Average Value of a Function on an Interval: If f is integrable on the closed interval $[a, b]$, then the average value f on the interval is $\frac{1}{b-a} \int_a^b f(x) dx = f(c) = \text{average value of } f$

Ex: $f(x) = \frac{9}{x^3} \quad [1, 3]$

$$\int_1^3 \frac{9}{x^3} dx = \frac{9}{c^3} (3-1)$$

$$\int_1^3 9x^{-3} dx = \frac{18}{c^3}$$

$$-\frac{9}{2} x^{-2} \Big|_1^3 = \frac{18}{c^3}$$

$$-\frac{9}{2}(3)^2 - \left(-\frac{9}{2}(1)^2\right) = \frac{18}{c^3}$$

$$\frac{8}{2} = \frac{18}{c^3}$$

$$4 = \frac{18}{c^3}$$

$$c^3 = \frac{18}{4} = \frac{9}{2}$$

$$c = \sqrt[3]{\frac{9}{2}}$$

Trig Substitution

$$\int \frac{10}{x^2 \sqrt{25-x^2}}$$

$$x = 5 \sin \theta \quad x^2 = 25 \sin^2 \theta$$
$$dx = 5 \cos \theta d\theta$$

step 1: plug trig substitution

$$= \int \frac{10 \cdot 5 \cos \theta}{(5 \sin \theta)^2 \sqrt{25 - (5 \sin \theta)^2}}$$

$$= \int \frac{10 \cdot 5 \cos \theta d\theta}{25 \sin^2 \theta \sqrt{25(1 - \sin^2 \theta)}}$$

$$1 - \sin^2 \theta = \cos^2 \theta$$

step 2: simplify & factor

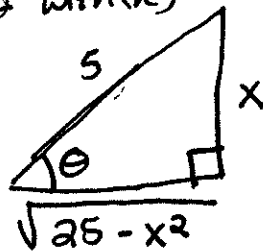
$$= \int \frac{2 \cancel{50} \cos \theta d\theta}{25 \sin^2 \theta \cdot \cancel{5} \cos \theta}$$

$$= \frac{2}{5} \int \frac{d\theta}{\sin^2 \theta} = \frac{2}{5} \int \csc^2 \theta d\theta$$

$$\frac{1}{\sin^2 \theta} = \csc^2 \theta$$

step 3: use triangle to replace θ with (x)

$$= -\frac{2}{5} \cot \theta + C$$



$$x = 5 \sin \theta$$
$$\sin \theta = \frac{x}{5}$$

$$= -\frac{2}{5} \cdot \frac{\sqrt{25-x^2}}{x} + C$$

$$\cot \theta = \frac{\cos \theta}{\sin \theta}$$

Partial Fractions: How to solve 3/12 to 9/11. 1/17-5/12.

Used in certain circumstances where there is an integral of a rational function where the polynomial denominator does not cancel with the numerator.

EX: $\int \frac{5x^2 + 20x + 5}{x^2 + 2x + 1} dx$ STEPS:

$$\frac{5x^2 + 20x + 5}{x(x+1)^2}$$

① for the denominator completely

$$= \frac{A}{x} + \frac{B}{x+1} + \frac{C}{x+1}^2$$

② find partial fraction form

- make sum of 3 ratios w/ factors as denominators

- add a square for each instance (square of factor)

(ex: $(x+1)$ is degree 2, so there is a $\frac{B}{x+1}$ term and a $\frac{C}{(x+1)^2}$)

- numerator is 2 terms / equation one degree lower

then its corresponding fraction

(ex: $\frac{A}{x}$; $\frac{Ax+B}{x^2+1}$; $\frac{Ax^2+Bx+C}{x^2+1}$; etc.)

③ find common denominator and simplify

$$= \frac{A(x+1)^2 + Bx(x+1) + Cx}{x(x+1)^2}$$

$$= \frac{A(x^2+2x+1) + Bx^2+Bx + Cx}{x(x+1)^2}$$

$$= \frac{Ax^2 + 2Ax + A + Bx^2 + Bx + Cx}{x(x+1)^2}$$

$$= \frac{(A+B)x^2 + (2A+B+C)x + A}{x(x+1)^2}$$

④ group based on x-terms

$$A+B=5$$

$$2A+B+C=20$$

$$A=5$$

⑤ set equal to original equation

- make system of equations and solve

Don't worry, $A=5$, $B=0$, $C=5$

$$\int \left(\frac{5}{x} + \frac{0}{x+1} + \frac{5}{x+1} \right) dx$$

$$= 5 \int \frac{dx}{x} - \int \frac{dx}{x+1} + 5 \int \frac{dx}{x+1}$$

$$= 5 \ln|x| - \ln|x+1| + \frac{5}{x+1} + C$$

⑥ substitute into partial fraction form and take integrals

⑦ CURBANE!



Riemann Sums and Definite Integrals

- Definite integrals of f gives you point a and b .

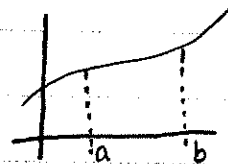
PROPERTIES:

- If $f(a)$ is defined (Point A to Point A...)

$$\int_a^a f(x) dx = 0$$


- If f is integral on $[a, b]$ (Point A to Point B)

$$\int_b^a f(x) dx = -\int_a^b f(x) dx$$



- Concept: Sum of the parts equals the whole (ex. $1+2=3$)

$$\int_a^c f(x) dx = \int_a^b f(x) dx + \int_b^c f(x) dx$$



- Concept: $ab = a \cdot b = a(b)$

$$\int_a^b k f(x) dx = k \int_a^b f(x) dx \quad **k = \text{constant}$$



- Concept: Sum of the parts equals the whole

$$\int_a^b [f(x) \pm g(x)] dx = \int_a^b f(x) dx \pm \int_a^b g(x) dx$$

- If $f(x) \geq 0$ on $[a, b]$, $\int_a^b f(x) dx \geq 0$

- If $f(x) \leq g(x)$, $\int_a^b f(x) dx \leq \int_a^b g(x) dx$

SOLVING FOR AREA:

STEP 1: Determine the integral. What is a ? What is b ?

STEP 2: Determine Δx or dx . $\frac{b-a}{n}$. Example: $\frac{1-(-2)}{n} = \frac{3}{n}$

STEP 3: Determine x . $a+i(\Delta x)$. Example: $-2 + \frac{3}{n}(i)$

STEP 4: Plug it in.

*Follow example below

Evaluate $\int_{-2}^1 2x dx \Rightarrow$ Step 1: ~~1-(-2)~~ $a = -2$ $b = 1$

Step 2: $\frac{b-a}{n}$, $\frac{1-(-2)}{n} = \frac{3}{n} = \Delta x$

Step 3: $x = a + i(\Delta x) = -2 + \frac{3}{n}(i) = x$

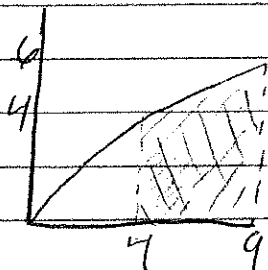
Step 4: $\lim_{n \rightarrow \infty} \sum_{i=1}^n f(x) \Delta x = \lim_{n \rightarrow \infty} \sum_{i=1}^n 2(-2 + \frac{3i}{n})(\frac{3}{n})$

Step 5: [Evaluate] $\lim_{n \rightarrow \infty} (\frac{3}{n})(2) \sum_{i=1}^n (-2 + \frac{3i}{n}) = \lim_{n \rightarrow \infty} \frac{6}{n} (-2 \sum_{i=1}^n 1 + \frac{3}{n} \sum_{i=1}^n i)$
 $= \lim_{n \rightarrow \infty} \frac{6}{n} \left\{ -2n + \frac{3}{n} \left[\frac{n(n+1)}{2} \right] \right\} = \lim_{n \rightarrow \infty} (42 + 9 + \frac{9}{n}) = \boxed{-3}$

Surface Area

$$S = 2\pi \int_a^b r(x) \sqrt{1 + [f'(x)]^2} dx \quad \rightarrow \text{Formula}$$

$$y = 2\sqrt{x} \quad (4, 9) \quad - \text{revolve about } x \text{ Axis}$$



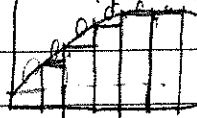
$$r(x) = 2\sqrt{x}, \quad f'(x) = \frac{1}{\sqrt{x}}$$

$$\text{Answer: } \frac{80\pi}{3} \sqrt{10} - \frac{40\pi}{3} \sqrt{5}$$

Arc Length.

By Zach (The Best)

- Arc length of a region refers to the length of a graphed line by measuring the hypotenuses of rectangles that make up the graph:



- You do this by using the equation: $\int_a^b \sqrt{1 + (f'(x))^2}$

- In words: Find the integral from a to b of the square root of one plus the derivative of the function squared.

- when there are multiple lines subtract the arc length of the line graphically at the bottom from the one on top.

Second Fundamental Theorem of Calculus

If the function f is continuous on an open interval I containing a , then, for every x in the interval the derivative of the integral from a to x is the function. However if it is the derivative of the integral from a to another function then you must also multiply by the derivative of the function in order to account for the chain rule.

$$\frac{d}{dx} \left[\int_a^x f(t) dt \right] = f(x)$$

$$\frac{d}{dx} \left[\int_a^{g(x)} f(t) dt \right] = f(g(x)) \cdot g'(x)$$

Examples ($a = \text{any constant}$)

1.
$$\frac{d}{dx} \left[\int_a^x t^2 dt \right] = f(x)$$

$$f(x) = (x)^2 = (x^2)$$

2.
$$\frac{d}{dx} \left[\int_a^{5x^2} t^2 dt \right] = f(g(x)) \cdot g'(x)$$

$$(5x^2)^2 \cdot 10x$$

$$25x^4 \cdot 10x = 250x^5$$

8.2 Integration By Parts ($x^n + \text{cyclic}$)**Formula:**

$$\int u dv = uv - \int v du$$

Common Integrals Using Integration by Parts:

$$\int x^n e^x dx$$

$$\int x^n \cos x dx$$

$$\int x^n \sin x dx$$

Guidelines for Integration by Parts:

- Let dv = the more complicated part and u = the remaining factors
- Let u = something that has a simpler derivative than its original (example: $(\ln x)' = 1/x$) and dv = the remaining part
- Remember that dv will always include the original equation's dx

Examples:

1. $\int x e^x dx$

$u = x$	$dv = e^x dx$	Choose your u and dv
$du = dx$	$v = e^x$	Take the derivative of u and integrate dv
$uv - \int v du$		FORMULA
$x e^x - \int e^x dx$		Plug your u and v into the formula
$x e^x - e^x + c$		Integrate $\int v du$ to solve

2. $\int x^2 \sin x dx$


$U = x^2$	$dv = \sin x dx$	Choose your u and dv
$Du = 2x dx$	$v = -\cos x$	Take the derivative of u and integrate dv
$uv - \int v du$		FORMULA
$-x^2 \cos x - \int -2x \cos x dx$		Plug u and v into your formula
$U = 2x$	$dv = -\cos x dx$	Choose u and v again
$Du = 2 dx$	$v = -\sin x$	Take the derivative of u and integrate dv
$-x^2 \cos x + 2x \sin x - \int -2 \sin x dx$		Plug your u and v into the formula again
$-x^2 \cos x + 2x \sin x + 2 \cos x + c$		Integrate $\int v du$ to solve

Using graphs and geometric formulas

Area under a function = $\int_a^b f(x) dx$

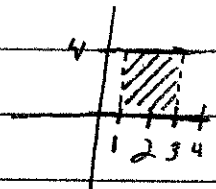
If f is continuous + nonnegative on the closed interval $[a, b]$, then the area of the region bounded by the graph of f , the x -axis, and the vertical lines $x=a$ and $x=b$.

ex: $\int_{-2}^2 \sqrt{4-x^2} dx$, $f(x) = \sqrt{4-x^2}$



The area of the region can be thought of as half the area of a circle of radius 2.

ex: $\int_1^3 4 dx$, $f(x) = 4$



The area of this region can be seen as a rectangle of width 2 and length 4. So, the area will be equal to 4×2

Common Area Formulas:

Rectangle/Square = $L \cdot W$

Triangle = $\frac{1}{2}bh$

Circle = πr^2 , Half-circle = $\frac{1}{2}\pi r^2$

ln x by parts

Nathan Heines

rule #1: always set ln x as u!

- We don't know how to integrate a natural log, so always set it as u to derive it.

* The derivative of $\ln x = \frac{1}{x}$

The substitution by parts formula:

$$\int u dv = uv - \int v du$$

Example with steps:

$$\int \frac{(\ln(x))^2}{x^2} \leftarrow \text{problem}$$

$u = \ln x$ $dv = x^{-2}$ \leftarrow pick your u and dv and
 $du = \frac{1}{x}$ $v = \frac{x^{-1}}{-1} = -\frac{1}{x}$ integrate/derive. (ln x will always be u)

$$\ln x \cdot \frac{x^{-1}}{-1} - \int \frac{x^{-1}}{-1} \cdot \frac{1}{x} \leftarrow \text{apply the formula}$$

$$\frac{x^{-1} \ln x}{-1} - \int \frac{x^{-2}}{-1} \leftarrow \text{multiply your parts}$$

$$\frac{x^{-1} \ln x}{-1} - \int \frac{x^{-2}}{-1} \leftarrow \text{simplify the integral (if possible)}$$

$$\frac{x^{-1} \ln x}{-1} - \frac{x^{-1}}{-1} \leftarrow \text{integrate the second half}$$

Yay! You did it!

Things to Know

U-Substitution!

Mitchell Patterson

A few IMPORTANT Rules

① The du is never in the bottom
Wait / that's it...

There must be a function & a function that is exactly or closely related to its differential.

① AKA. $\int \underbrace{(x^3+5)}_u \underbrace{2x^2 dx}_{\text{Differential of } u}$ | $u = x^3+5$
| $du = 2x^2 dx$

After substituting for the u & du , the above integral is equivalent to:

② $\int u du$ - Now solve it like a regular problem!
Yay!

$\int u du = \frac{1}{2}u^2$ ③ - BUT WAIT!
- remember to SUBSTITUTE THE U BACK IN! ☺

④ If $u = x^3+5$, then $\frac{1}{2}u^2$

$$\boxed{= \frac{1}{2}(x^3+5)^2}$$



The answer!

- But they won't always be so nice...

EXAMPLE A

$$\int \frac{2x-4}{x^2+4x+13} dx$$

Sometimes completing the square might be necessary.

Notice: The derivative of $x^2+4x+13 = 2x+4$, so:

① Add zero ($2x+4-8 = 2x-4$)

$$\int \frac{2x+4}{x^2+4x+13} - \int \frac{8}{x^2+4x+13}$$

$$\textcircled{2} \int \frac{2x+4}{x^2+4x+13}$$

$$u = x^2+4x+13 \\ du = 2x+4 dx$$

$$\int \frac{du}{u} = \ln|x^2+4x+13|$$

$$\textcircled{3} \int \frac{1}{x^2+4x+4-4+13}$$

$$= \int \frac{1}{x^2+4x+4+9} = \int \frac{1}{(x+2)^2+9}$$

$$= \ln|x^2+4x+13| - \frac{1}{3} \arctan\left(\frac{x+2}{3}\right) + C^*$$

* Use arctan, $\frac{1}{z^2+a^2} = \frac{1}{a} \arctan \frac{u}{a}$
 where $u = x+2$

EXAMPLE B

$$\int \tan \theta d\theta$$

Sometimes the du needs to be played with

$$= \int \frac{\sin \theta}{\cos \theta} d\theta \quad u = \cos \theta \\ du = -\sin \theta d\theta$$

The du isn't exactly what we need, so

$$du = -\sin \theta d\theta$$


$$-du = \sin \theta d\theta$$

$$\frac{1}{6} du = \sin \theta d\theta$$

Perfect!

$$\int -\frac{1}{6} \cdot \frac{du}{u} = -\frac{1}{6} \int \frac{du}{u}$$

$$= -\frac{1}{6} \ln|\cos \theta| + C$$

Simple! 

Hannah Lee

Integral study guide - Volume of Solids of Revolution

From what I have studied so far, there are 4 types of V.O.S.R problems.

- 1) revolving around x-axis
- 2) revolving around y-axis
- 3) revolving around $x = \text{something}$
- 4) revolving around $y = \text{something}$

However, my ultimate 6 step approach can solve all 4 types!

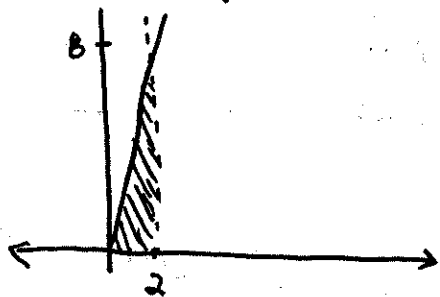
- First, draw the graph.
- Second, determine where to revolve around. dx or dy ?
- Third, draw the volume solid (optional if you hate drawing)
- Fourth, determine the radius
- Fifth, plug in to the formula
- Sixth, evaluate if Ms. Brewer or instruction tells you to

< Example 1-1 >

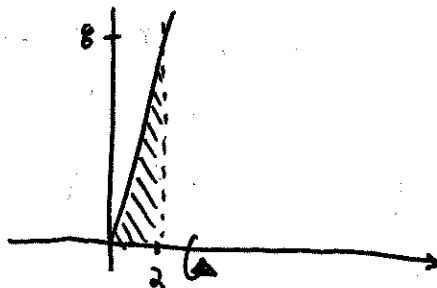
$y = 2x^2$, $y = 0$, $x = 2$, revolve about the line x -axis

▲ Draw the graph ▲

▲ Determine the line ▲

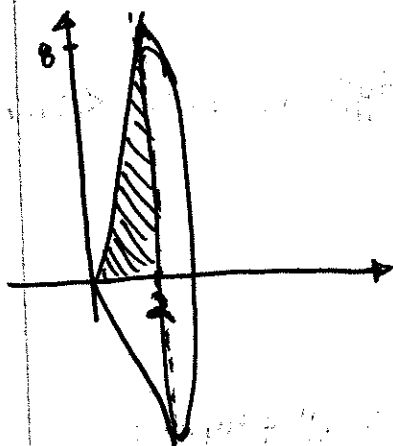


\Rightarrow

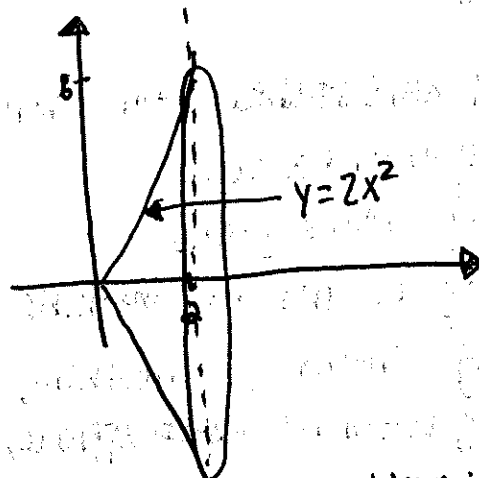


\Rightarrow

▲ Draw the solid ▲



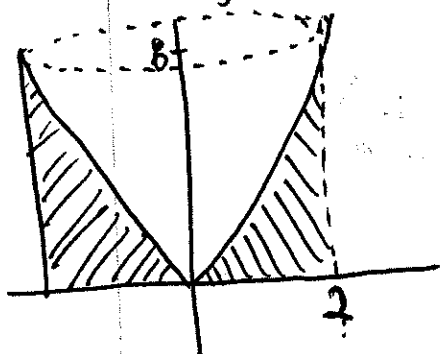
▲ Determine the radius ▲



- We can see that the coordinates for x-axis problem is found at x-axis therefore, $\int_0^2 \pi (2x^2)^2 dx$.

<Example 1-2>

Let's do the same problem but revolve around y-axis.
This is a little different than x-axis problem but it's still fairly simple.



- We can obviously see that the solid formed a cylinder. However, it is hollow inside. In this case, the volume of solid changes to volume of outer solid - volume of inside.

$$V = 32\pi - \int_0^B \pi y/2 dy$$

equals to

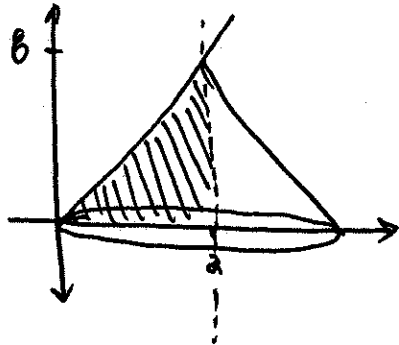
$$V = [\pi (2)^2 (B)] - \int_0^B \pi y/2 dy$$

coordinates for y-axis!

Why not $2x^2$? because solid is revolved around y-axis the radius has to change to "to y".

<Example 1-3>

revolved around $x=2$



$$V = \int_0^B \pi \left(2 - \sqrt{\frac{y}{2}} \right)^2 dy$$

↑
Why subtract 2?

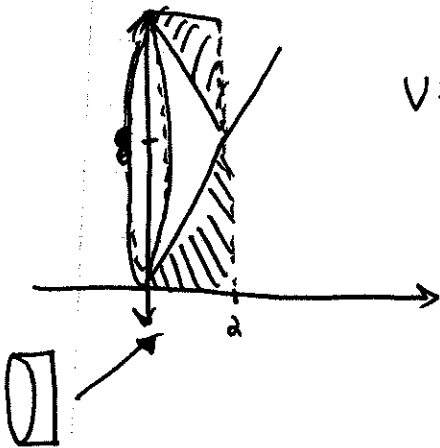
in V.D.S.R, radius means the distance from origin. therefore, since the radius is $x = \text{something}$ rather than x -axis or y -axis we have to subtract it.

<Example 1-4>

revolve around $x=B$

V outer cylinder - V bowl

$$V = \pi (B)^2 a - \int_0^a \pi (B - 2x)^2 dx$$



Final Exam Study Guide

Position, Velocity, and Acceleration - Linear Motion

I. Position

• the derivative of a function can represent the rate of change of one variable with respect to another \rightarrow rate of change can describe the motion of an object moving in a straight line

\hookrightarrow the line of motion is represented by a horizontal or vertical line with a designated origin, and the position function (s) gives the position (relative to the origin) of an object as a function of time

$$\Delta s = s(t + \Delta t) - s(t)$$

where $\Delta s = (\text{final position} - \text{initial position}) = \text{change in distance}$

$s =$ position at time t

$t =$ time

$\Delta t = (\text{time at final position} - \text{time at initial position}) = \text{change in time}$

$s(t) =$ position at time t

Rate = distance / time

II. Average Velocity of a Falling Object

$$\text{average velocity} = \frac{\text{change in distance}}{\text{change in time}} = \frac{\Delta s}{\Delta t}$$

Steps to solve:

Step 1) Given the position function and the time interval, solve for the final and initial position.

Step 2) Subtract the initial position from the final position to get Δs .

Step 3) Subtract initial time from the final time to get Δt .

Step 4) Plug in the Δs and Δt values into the average velocity formula to obtain your answer.

Example: Find the average velocity over the time interval $[1, 2]$

Position function: $s = -16t^2 + 100$ where s is measured in feet and t is measured in seconds

Step 1) initial position: $s(1) = -16(1)^2 + 100 = 84$ ft

final position: $s(2) = -16(2)^2 + 100 = 36$ ft

Step 2) $\Delta s = 36 - 84 = -48$ ft

Step 3) $\Delta t = 2 - 1 = 1$ second

Step 4) average velocity = $\frac{-48 \text{ ft}}{1 \text{ sec}} = -48 \text{ ft/sec}$

* Note: The negative average velocity indicates that the object is moving downward *

III. (Instantaneous Velocity)

- the average velocity is the slope of the secant line
- the instantaneous velocity is the slope of the tangent line
 - you can approximate the slope of the tangent line by calculating the slope of the secant line
 - you can also approximate the instantaneous velocity at time t by calculating the average velocity over a small time interval $[t, t + \Delta t]$, and by taking the limit as Δt approaches zero, you can obtain the velocity at t

$$v(t) = \lim_{\Delta t \rightarrow 0} \frac{s(t + \Delta t) - s(t)}{\Delta t} = s'(t)$$

- The position function of a free-falling object is

$$s(t) = \frac{1}{2}gt^2 + v_0t + s_0$$

s_0 = initial height

v_0 = initial velocity

g = accl. due to gravity

and the velocity function is the derivative of the position function:

- on Earth, $g \approx 9.8 \text{ m/s}^2$ or -32 ft/s^2

- velocity can be positive, negative, or zero
- Speed = $|\text{velocity}|$
- when $v=0$, the object is at its maximum height

Steps to Solve:

- 1) To find the instantaneous velocity at time t given the position function, find the derivative of the position function. This is the velocity function.
- 2) Plug in t to the velocity function to find the instantaneous velocity.

Example: Find the velocity at time $t=1.5$ seconds.

Position function: $-16t^2 + 16t + 32$

Step 1) $s'(t) = v(t) = -32t + 16$

Step 2) $v(1.5) = -32(1.5) + 16 = \boxed{-32 \text{ ft/sec}}$

* Note: velocity is positive when an object is rising and negative when an object is falling.*

IV. Acceleration

• you can obtain an acceleration function by differentiating a velocity function or differentiating a position function twice

- Position function: $s(t)$
- Velocity function: $v(t) = s'(t)$
- Acceleration function: $a(t) = v'(t) = s''(t)$

• In other words, the acceleration function $a(t)$ is the second derivative of $s(t)$, which is an example of a higher-order derivative, and you can define derivatives of any positive integer order:

First derivative	y'	$f'(x)$
Second derivative	y''	$f''(x)$
Third derivative	y'''	$f'''(x)$
Fourth derivative	$y^{(4)}$	$f^{(4)}(x)$
⋮		
n^{th} derivative	$y^{(n)}$	$f^{(n)}(x)$

Steps to Solve:

1) a) To find the acceleration at time t given the position function, differentiate the position function twice.

b) To find the acceleration at time t given the velocity function, differentiate the velocity function once.

2) Plug in t to the acceleration function to obtain the value for the acceleration at time t .

Example: Find the acceleration of a car starting from rest at $t = 5$ sec
 velocity function: $v(t) = \frac{100}{at+15}$, where v is measured in ft/sec

$$\text{Step 1) } v(t) = \frac{100}{at} + \frac{100}{15} = 50t^{-1} + \frac{20}{3}$$

$$v'(t) = -50t^{-2} = a(t)$$

$$\text{Step 2) } a(t) = -50(5)^{-2} = \boxed{-2 \text{ ft/sec}^2}$$

Integrals of Trigonometric Functions

Derivative Rules

$$\frac{d}{dx} \sin x = \cos x$$

$$\frac{d}{dx} \cos x = -\sin x$$

$$\frac{d}{dx} \tan x = \sec^2 x$$

$$\frac{d}{dx} \cot x = -\csc^2 x$$

$$\frac{d}{dx} \sec x = \sec x \tan x$$

$$\frac{d}{dx} \csc x = -\csc x \cot x$$

Antiderivative Rules

$$\int \cos x \, dx = \sin x + c$$

$$\int \tan x \, dx = -\ln |\cos x| + c$$

$$\int \sin x \, dx = -\cos x + c$$

$$\int \cot x \, dx = \ln |\sin x| + c$$

$$\int \sec^2 x \, dx = \tan x + c$$

$$\int \sec x \, dx = \ln |\sec x + \tan x| + c$$

$$\int \csc^2 x \, dx = -\cot x + c$$

$$\int \csc x \, dx = -\ln |\csc x + \cot x| + c$$

$$\int (\sec x \tan x) \, dx = \sec x + c$$

$$\int (\csc x \cot x) \, dx = -\csc x + c$$

$$\int \frac{dx}{\sqrt{a^2 - u^2}} = \arcsin \frac{u}{a} + c$$

$$\int \frac{dx}{a^2 + x^2} = \frac{1}{a} \arctan \frac{x}{a} + c$$

$$\int \frac{dx}{x\sqrt{x^2 - a^2}} = \frac{1}{a} \operatorname{arcsec} \frac{|x|}{a} + c$$

Double Angle Identities

$$\sin 2x = 2 \sin x \cos x$$

$$\cos 2x = \cos^2 x - \sin^2 x = 2 \cos^2 x - 1 = 1 - 2 \sin^2 x$$

$$\tan 2x = \frac{2 \tan x}{1 - \tan^2 x}$$

10/11/11

Pythagorean Identities

$$\sin^2 x + \cos^2 x = 1$$

$$1 + \tan^2 x = \sec^2 x$$

$$1 + \cot^2 x = \csc^2 x$$

Power-Reducing Formulas:

$$\sin^2 x = \frac{1 - \cos 2x}{2}$$

$$\cos^2 x = \frac{1 + \cos 2x}{2}$$

$$\tan^2 x = \frac{1 - \cos 2x}{1 + \cos 2x}$$

Lulu Yehuang

Integration by Parts:

2 cycles

$\int e^\theta \cos \theta d\theta$	$u = \cos \theta$ $du = -\sin \theta d\theta$	$dv = e^\theta d\theta$ $v = e^\theta$	Start with integration by parts
$= e^\theta \cos \theta - (-\int e^\theta \sin \theta d\theta)$	$u = \sin \theta$ $du = \cos \theta d\theta$	$dv = e^\theta d\theta$ $v = e^\theta$	Do it again

$$= e^\theta \cos \theta + (e^\theta \sin \theta - \int e^\theta \cos \theta d\theta)$$

$$\int e^\theta \cos \theta d\theta = e^\theta \cos \theta + e^\theta \sin \theta - \int e^\theta \cos \theta d\theta$$

Remember that these are equivalent to each other

$$= 2 \int e^\theta \cos \theta d\theta = e^\theta \cos \theta + e^\theta \sin \theta$$

Then simple algebra

$$\int e^\theta \cos \theta d\theta = \frac{e^\theta (\cos \theta + \sin \theta)}{2} + C$$

Don't forget the constant

$$\int e^{3\theta} \sin 2\theta d\theta$$

So, you know that you'll have to do two integration by parts
But, how do you know your u and dv?

u = trig function dv = exponential function & usually, not always

$\int e^{3\theta} \sin 2\theta d\theta$	$u = \sin 2\theta$ $du = 2 \cos 2\theta d\theta$	$dv = e^{3\theta}$ $v = \frac{1}{3} e^{3\theta}$
$= \frac{e^{3\theta} \sin 2\theta}{3} - \int \frac{e^{3\theta} 2 \cos 2\theta d\theta}{3}$		

$= \frac{e^{3\theta} \sin 2\theta}{3} - \frac{2}{3} \int e^{3\theta} \cos 2\theta d\theta$	$u = \cos 2\theta$ $du = -2 \sin 2\theta d\theta$	$dv = e^{3\theta}$ $v = \frac{1}{3} e^{3\theta}$
--	--	---

$$= \frac{e^{3\theta}}{3} \sin 2\theta - \frac{2}{3} \left(\frac{e^{3\theta}}{3} \cos 2\theta + \frac{2}{3} \int e^{3\theta} \sin 2\theta d\theta \right)$$

$\frac{1}{9} + \frac{2}{9}$

$$\int e^{3\theta} \sin 2\theta d\theta = \frac{e^{3\theta} \sin 2\theta}{3} - \frac{2e^{3\theta} \cos 2\theta}{9} - \frac{4}{9} \int e^{3\theta} \sin 2\theta d\theta$$

$\frac{1}{9}$

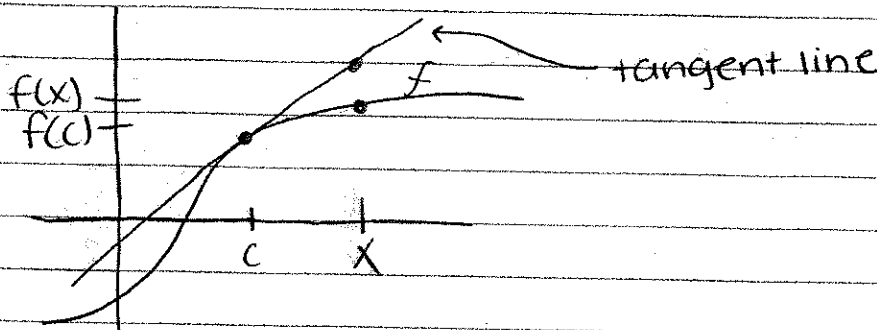
$$\frac{13/9}{13/9} \int e^{3\theta} \sin \theta d\theta = \frac{e^{3\theta} \sin \theta}{9} - \frac{2e^{3\theta} \cos \theta}{9}$$

$$\therefore \int e^{3\theta} \sin \theta d\theta = \frac{9e^{3\theta} \sin \theta}{13(9)} - \frac{18e^{3\theta} \cos \theta}{13(9)}$$

$$= \int e^{3\theta} \sin \theta d\theta = \frac{e^{3\theta}}{13} (\sin \theta - 2 \cos \theta) + C$$

{Renata}

Differentials + tangent approximations



if f is differentiable at c ,
 eq. tangent line $\rightarrow y - f(c) = f'(c)(x - c)$
 $y = f(c) + f'(c)(x - c)$

find the differential dy .

12. $y = 3x^{2/3}$
 $dy = 2x^{-1/3} dx$

14. $y = \sqrt{9 - x^2}$
 $dy = \frac{1}{2}(9 - x^2)^{-1/2} (-2x) dx$

tangent approx.

*derivation ↓
 $\Delta y = f(c + \Delta x) - f(c)$
 $dy = f'(x) dx$
 $\Rightarrow \Delta y \approx dy$
 set them equal to each other

Use differentials to approximate $\sqrt[3]{26}$

equation to use \rightarrow $f(c + \Delta x) \approx f(c) + f'(c) \Delta x$ *

$f(x) = \sqrt[3]{x}$
 function

$c = 27$
 "pretty" number
 you can easily
 evaluate

$\Delta x = dx = -1$
 what you add to
 your c to get
 your original value

① take derivative

of your function:

$f(x) = \sqrt[3]{x} = x^{1/3}$
 $f'(x) = \frac{1}{3} x^{-2/3} = \frac{1}{3(\sqrt[3]{x})^2}$

[ex: $27 + (-1) = 26$]

③ find $f(c)$:

$f(x) = \sqrt[3]{x}$
 $f(27) = \sqrt[3]{27} = 3$

② find $f'(c)$ by plugging c into $f'(x)$

$f'(27) = \frac{1}{3(\sqrt[3]{27})^2} = \frac{1}{27}$

now plug everything into equation:

$$f(c + \Delta x) = f(c) + f'(c)\Delta x$$

$$f(26) = 3 + \frac{1}{27}(-1)$$

$$f(26) = \left(3 \cdot \frac{27}{27}\right) - \frac{1}{27} \rightarrow f(26) = \frac{81}{27} - \frac{1}{27} = \boxed{\frac{80}{27}}$$

Inverse Trig + Completing The Square

$$\frac{d}{dx} [\arcsin u] = \frac{u'}{\sqrt{1-u^2}}$$

$$\frac{d}{dx} [\arctan u] = \frac{u'}{1+u^2}$$

$$\frac{d}{dx} [\operatorname{arcsec}] = \frac{u'}{|u|\sqrt{u^2-1}}$$

$$\int \frac{du}{\sqrt{a^2-u^2}} = \arcsin \frac{u}{a} + C$$

$$\int \frac{du}{a^2+u^2} = \frac{1}{a} \arctan \frac{u}{a} + C$$

$$\int \frac{du}{u\sqrt{u^2-a^2}} = \frac{1}{a} \operatorname{arcsec} \frac{|u|}{a} + C$$

Completing the Square:

$$1. \quad ax^2 + bx + c$$

$$2. \quad a\left(x^2 + \frac{b}{a}x\right) + c$$

$$3. \quad a\left(x^2 + \frac{b}{a}x + \left(\frac{b}{2a}\right)^2\right) + c - \frac{b^2}{4a}$$

$$4. \quad a\left(x + \frac{b}{2a}\right)^2 + \frac{4ac - b^2}{4a}$$

you can use completing the square in order to get a denominator like one of the ones in the inverse trig formulas.

Inverse Trig + Completing the Square

P.2

Example 1

$$\int \frac{dx}{x^2 + 2x + 5}$$

1. Take the denominator, complete the square

$$x^2 + 2x + 5$$

↳ $2/1 = 1$, $1^2 = 1$, so we want this to look like: $x^2 + 2x + 1$.

We can do this like this: $x^2 + 2x + 1 + 4$

$$= \int \frac{dx}{x^2 + 2x + 1 + 4} = \int \frac{dx}{(x+1)^2 + 4} = \int \frac{dx}{(x+1)^2 + 2^2}$$

$$\text{recall: } \int \frac{dx}{a^2 + u^2} = \frac{1}{a} \arctan \frac{u}{a} + C$$

So, applying this \int we get: $\frac{1}{2} \arctan \frac{x+1}{2} + C$

Note: $x+1$ is not "a" a must be a constant, and is therefore 2

Inverse Trig + Completing The Square

example 2

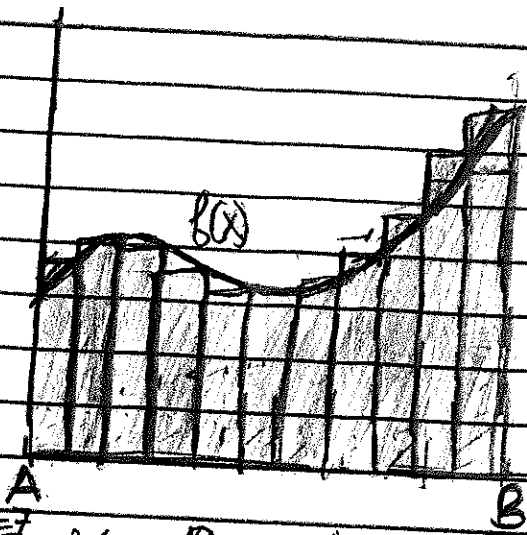
P. 3

$$\int \frac{dx}{\sqrt{21-4x-x^2}} \rightarrow 21-4x-x^2 = 21-[x^2+4x] \\ = 21+4-[x^2+4x+4] \\ = 25-(x+2)^2$$

$$\int \frac{dx}{\sqrt{21-4x-x^2}} = \int \frac{dx}{\sqrt{25-(x+2)^2}} = \int \frac{dx}{\sqrt{5^2-(x+2)^2}}$$

recall $\int \frac{du}{\sqrt{a^2-u^2}} = \arcsin \frac{u}{a} + C,$

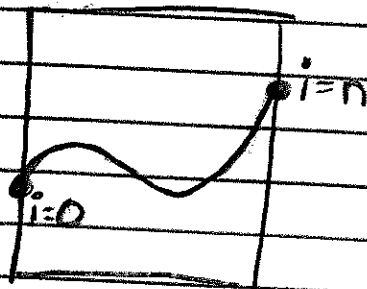
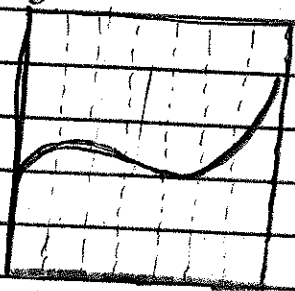
$$\int \frac{dx}{\sqrt{5^2-(x+2)^2}} = \arcsin \frac{x+2}{5} + C$$



The area under the $f(x)$ is approximated from point A to point B


$$\sum_{i=1}^n f\left(a + \frac{B-A}{n}i\right) \cdot \frac{B-A}{n}$$

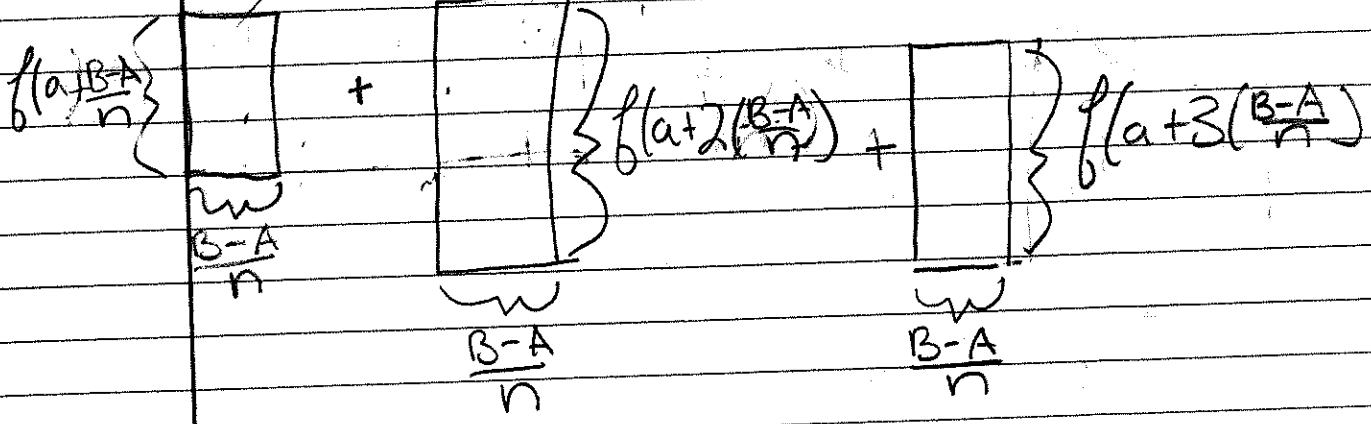
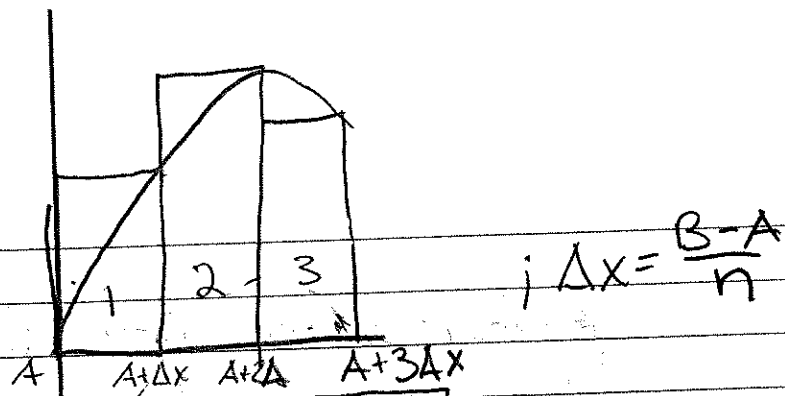
- this results: added up n rectangles defined by height = $f\left(a + \frac{B-A}{n}i\right)$ and width = $\frac{B-A}{n}$



If I divide the graph from A to B evenly in n pieces each of the rectangular-ish shapes will have a width of $\frac{B-A}{n}$

to get the heights of these "rectangles" you use $f\left(a + \frac{B-A}{n}i\right)$. You can kinda view it as $f(x + \Delta x)$. so if your original x was 1 but the value you want is $\Delta x = 2$ away $f(1+2) = f(3)$






So, this would look like

$$\sum_{i=1}^n f\left(a + i\left(\frac{B-A}{n}\right)\right) \left(\frac{B-A}{n}\right)$$

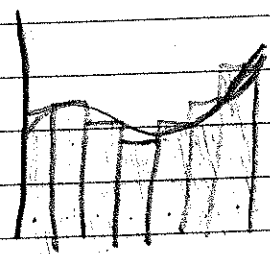
- The graph/equations above have been approximations to find the real area you have to make $n = \infty$. This makes it so you are "approximating" using infinity rectangles with height $f\left(a + \left(\frac{B-A}{n}\right)i\right)$ and width $\frac{B-A}{n}$.

$$\lim_{n \rightarrow \infty} \sum_{i=1}^n f\left(a + \left(\frac{B-A}{n}\right)i\right) \left(\frac{B-A}{n}\right)$$




$\lim_{n \rightarrow \infty}$

vs.



$n=7$

set up the notation for this graph $f(x) = x^2$ as n approaches ∞



$$\lim_{n \rightarrow \infty} \sum_{i=1}^n \left(0 + \frac{3i}{n}\right)^2 \left(\frac{3}{n}\right)$$

to solve these you will need to try and manipulate the notations into simple series like

$$\sum c, \sum i, \sum i^2, \sum i^3$$

$$\sum_{i=1}^n c = cn \quad ; \quad c = \text{constant}$$

$$\sum_{i=1}^n i = \frac{n(n+1)}{2}$$

$$\sum_{i=1}^n i^2 = \frac{n(n+1)(2n+1)}{6}$$

$$\sum_{i=1}^n i^3 = \frac{n^2(n+1)^2}{4}$$

you can achieve this by using rules like:

$$\sum a i^x = a \cdot \sum i^x$$

$$\sum = \frac{27}{n^3} i^2 = \frac{27}{n^3} \sum i^2 = \frac{27}{n^3} \left(\frac{n(n+1)(2n+1)}{6} \right)$$

The rest is algebra good luck





$$A=0$$

$$B=3$$

$$f(x) = x^3$$

Set up the sigma notation and solve

Answer + work

$$\lim_{n \rightarrow \infty} \sum_{i=1}^n (0 + \frac{3}{n}i)^3 (\frac{3}{n}) = \sum_{i=1}^n \frac{81}{n^4} i^3 = \frac{81}{n^4} \sum_{i=1}^n i^3 =$$

$$\frac{81}{n^4} \left(\frac{n^2(n+1)^2}{4} \right) = \frac{81}{n^4} \left(\frac{n^4 + 2n^3 + n^2}{4} \right) =$$

$$\frac{81}{4} + \frac{2n}{4n} + \frac{1}{n^2} = \frac{81}{4} \text{ as } n \rightarrow \infty \left(\frac{1}{\infty} = 0 \right)$$

you can check your work with integrals

$$\int_0^3 x^3 = \frac{1}{4} x^4 \Big|_0^3 = \frac{1}{4} (81) - \frac{1}{4} (0) = \frac{81}{4}$$